



ORGOREVIEW

Question Vault

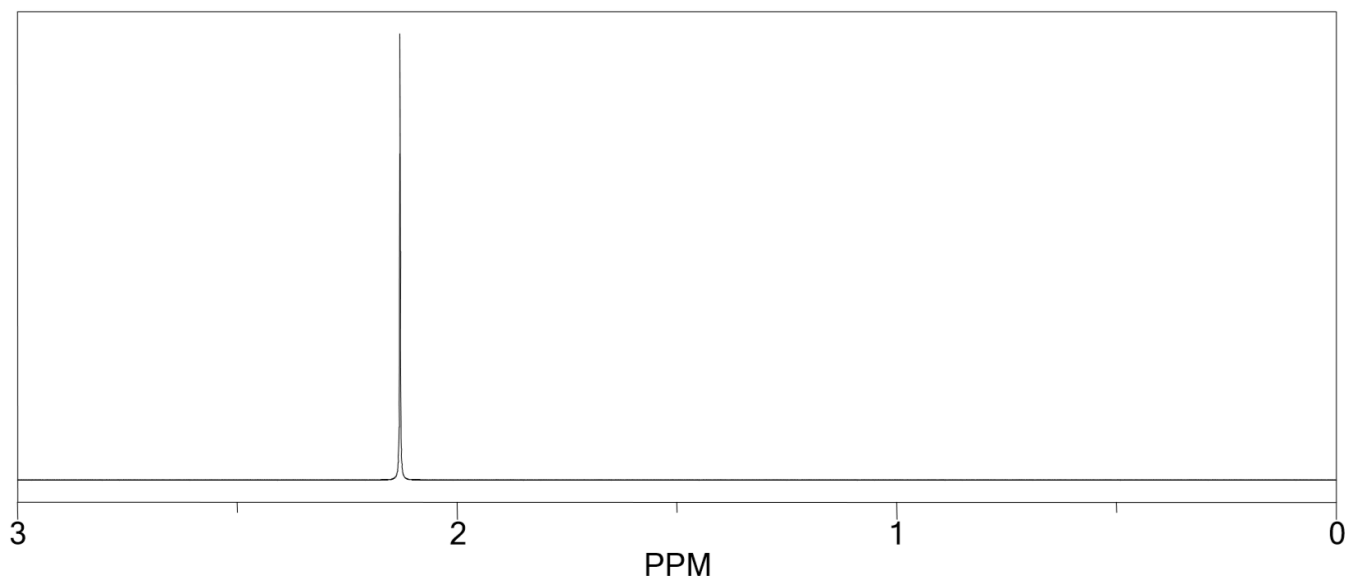
Welcome to orgoreview question vault. We have 5000 more problems for you to solve.

Share

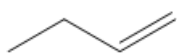
Choose the compound X (C_4H_8) consistent with the following data:

(a) Ozonolysis of X gave compounds Y (CH_2O) and Z (C_3H_6O).

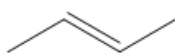
(b) Compound Z has the following 1H NMR spectrum.



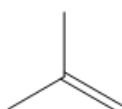
(A)



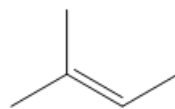
(B)



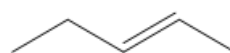
(C)



(D)

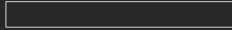


(E)



VIDEO SOLUTION





How to Reach Us

Todd's Test Prep
2255 Glades Road
Suite 324A
Boca Raton, Florida 33431
E-mail: help@orgoreview.com

Links

[Contact](#)

[Terms](#)

[Privacy Policy](#)

follow us



Copyright 2025. All Rights Reserved.