



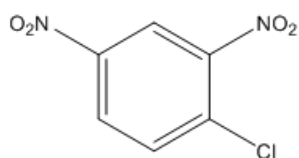
ORGOREVIEW

Question Vault

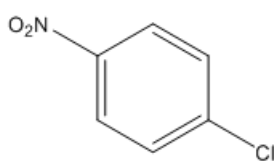
Welcome to orgoreview question vault. We have 5000 more problems for you to solve.

Share

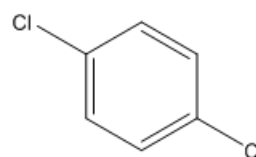
Select the order that has the following compounds correctly arranged with respect to increasing rate of reaction with potassium hydroxide (by S_NAr).



1



2



3

☐ (A)

1 2 3

increasing
→
reaction rate

☐ (B)

1 3 2

increasing
→
reaction rate

☐ (C)

2 1 3

increasing
→
reaction rate

☐ (D)

2 3 1

increasing
→
reaction rate

☐ (E)

3 2 1

increasing
→
reaction rate

☐ (F)

3 1 2

increasing
→
reaction rate

VIDEO SOLUTION



How to Reach Us

Todd's Test Prep
2255 Glades Road
Suite 324A
Boca Raton, Florida 33431
E-mail: help@orgoreview.com

Links

[Contact](#)
[Terms](#)
[Privacy Policy](#)

follow us



Copyright 2025. All Rights Reserved.