



# ORGOREVIEW

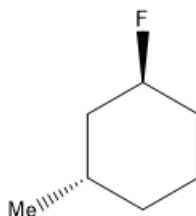
## Question Vault

Welcome to orgoreview question vault. We have 5000 more problems for you to solve.

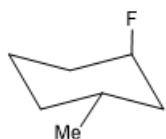
Share

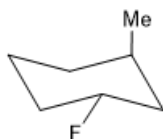
Using the data shown below, choose the most stable conformation of (1S,3S)-1-fluoro-3-methylcyclohexane.



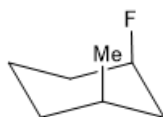
(A)



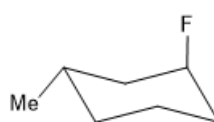
(B)



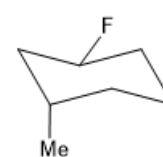
(C)



(D)



(E)

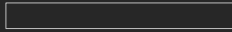


(F)



VIDEO SOLUTION





### How to Reach Us

Todd's Test Prep  
2255 Glades Road  
Suite 324A  
Boca Raton, Florida 33431  
E-mail: [help@orgoreview.com](mailto:help@orgoreview.com)

### Links

[Contact](#)  
[Terms](#)  
[Privacy Policy](#)

### follow us

