



# ORGOREVIEW

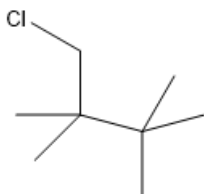
## Question Vault

Welcome to orgoreview question vault. We have 5000 more problems for you to solve.

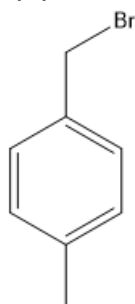
Share

A student tried to synthesize each of the following compounds by a direct free radical reaction of the corresponding hydrocarbon with the halogen. Which compound would be the least likely to form as the single major mono-substitution product?

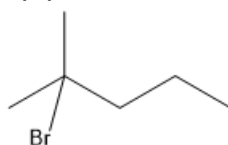
☐ (A)



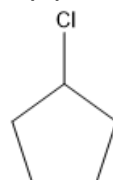
☐ (B)



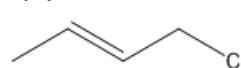
☐ (C)



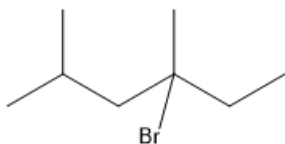
☐ (D)



☐ (E)



☐ (F)



VIDEO SOLUTION





### How to Reach Us

Todd's Test Prep  
2255 Glades Road  
Suite 324A  
Boca Raton, Florida 33431  
E-mail: [help@orgoreview.com](mailto:help@orgoreview.com)

### Links

[Contact](#)

[Terms](#)

[Privacy Policy](#)

**follow us**



Copyright 2025. All Rights Reserved.