



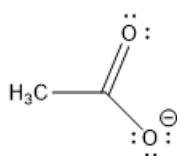
ORGOREVIEW

Question Vault

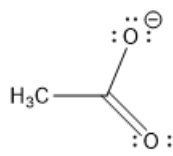
Welcome to orgoreview question vault. We have 5000 more problems for you to solve.

Share

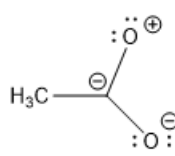
reWhich of the following resonance structures is the least important contributor to the resonance hybrid of the acetate anion, CH_3CO_2^- ?



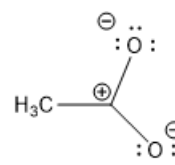
1



2



3



4

- ☐ (A) 1 ☐ (B) 2 ☐ (C) 3 ☐ (D) 4 ☐ (E) 1 and 2

VIDEO SOLUTION



How to Reach Us
Todd's Test Prep
2255 Glades Road
Suite 324A

Boca Raton, Florida 33431
E-mail: help@orgoreview.com

Links

[Contact](#)

[Terms](#)

[Privacy Policy](#)

follow us

