



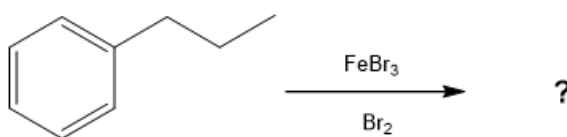
ORGOREVIEW

Question Vault

Welcome to orgoreview question vault. We have 5000 more problems for you to solve.

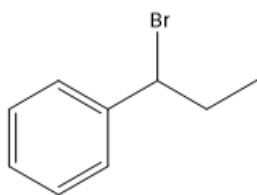
Share

Which compound is predicted to be the major product of the following reaction?

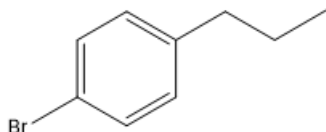


Consider the following isomeric compounds.

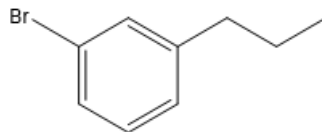
☐ (A)



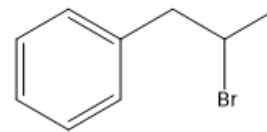
☐ (B)



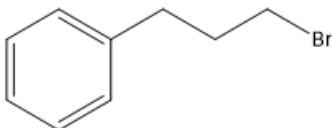
☐ (C)



☐ (D)



☐ (E)





How to Reach Us

Todd's Test Prep
2255 Glades Road
Suite 324A
Boca Raton, Florida 33431
E-mail: help@orgoreview.com

Links

[Contact](#)

[Terms](#)

[Privacy Policy](#)

follow us



Copyright 2025. All Rights Reserved.