



# ORGOREVIEW

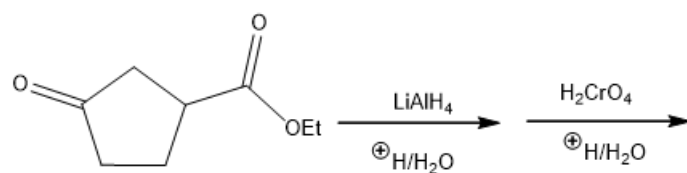
## Question Vault

Welcome to orgoreview question vault. We have 5000 more problems for you to solve.

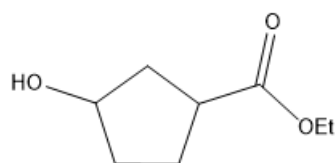
Share

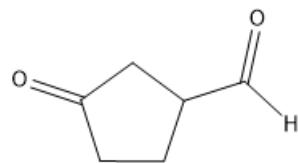
Choose the major product of the following reaction sequence.



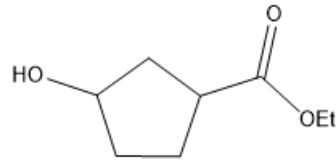
(A)



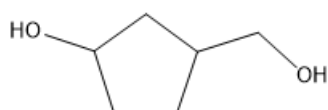
(B)



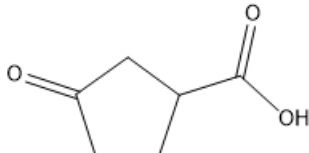
(C)



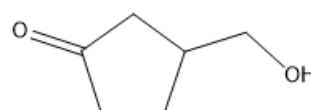
(D)



(E)




(F)



VIDEO SOLUTION





### How to Reach Us

Todd's Test Prep  
2255 Glades Road  
Suite 324A  
Boca Raton, Florida 33431  
E-mail: [help@orgoreview.com](mailto:help@orgoreview.com)

### Links

[Contact](#)

[Terms](#)

[Privacy Policy](#)

### follow us

