



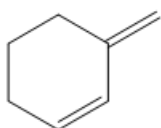
ORGOREVIEW

Question Vault

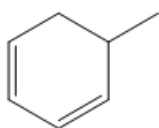
Welcome to orgoreview question vault. We have 5000 more problems for you to solve.

Share

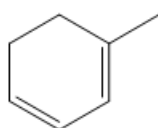
Which of the following compounds will form the same two major products upon addition of one equivalent of HCl?



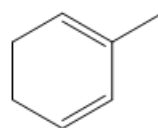
1



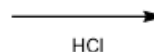
2



3



4



- ☐ (A) 1 and 2 ☐ (B) 3 and 4 ☐ (C) 1, 2, and 3 ☐ (D) 1, 3, and 4 ☐ (E) 2, 3 and 4 ☐ (F) 1, 2, 3, and 4

VIDEO SOLUTION



How to Reach Us

Todd's Test Prep
2255 Glades Road
Suite 324A

Boca Raton, Florida 33431

E-mail: help@orgoreview.com

Links

[Contact](#)

[Terms](#)

[Privacy Policy](#)

follow us



Copyright 2026. All Rights Reserved.