



# ORGOREVIEW

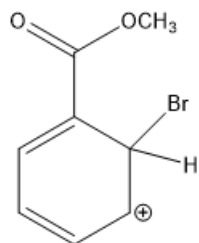
## Question Vault

Welcome to orgoreview question vault. We have 5000 more problems for you to solve.

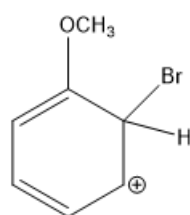
Share

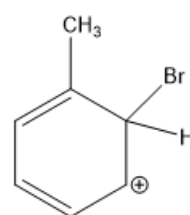
Select the order that has the following cyclohexadienyl cations correctly arranged with respect to increasing stability.



1



2



3

(A)

1 2 3

increasing

stability

(B)

1 3 2

increasing

stability

(C)

2 1 3

increasing

stability

(D)

2 3 1

increasing

stability

(E)

3 2 1

increasing

stability

(F)

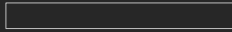
3 1 2

increasing

stability

VIDEO SOLUTION





### How to Reach Us

Todd's Test Prep

2255 Glades Road

Suite 324A

Boca Raton, Florida 33431

E-mail: [help@orgoreview.com](mailto:help@orgoreview.com)

### Links

[Contact](#)

[Terms](#)

[Privacy Policy](#)

### follow us

