



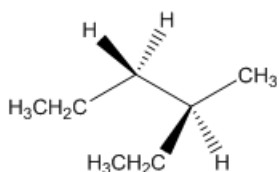
# ORGOREVIEW

## Question Vault

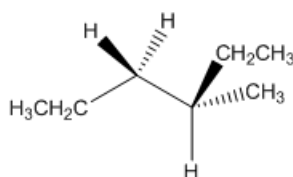
Welcome to orgoreview question vault. We have 5000 more problems for you to solve.

Share

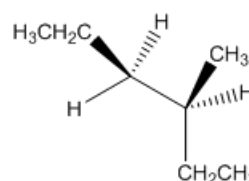
Choose the order that has the following conformations of (S)-3-methylhexane correctly arranged with respect to increasing stability.



1



2



3

☐ (A)

1 2 3

increasing



stability

☐ (B)

1 3 2

increasing



stability

☐ (C)

2 1 3

increasing



stability

☐ (D)

2 3 1

increasing



stability

☐ (E)

3 2 1

increasing



stability

☐ (F)

3 1 2

increasing



stability

VIDEO SOLUTION



#### How to Reach Us

Todd's Test Prep  
2255 Glades Road  
Suite 324A  
Boca Raton, Florida 33431  
E-mail: [help@orgoreview.com](mailto:help@orgoreview.com)

#### Links

[Contact](#)  
[Terms](#)  
[Privacy Policy](#)

#### follow us

