



ORGOREVIEW

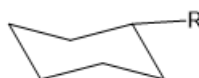
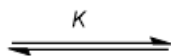
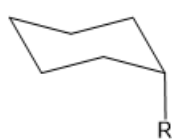
Question Vault

Welcome to orgoreview question vault. We have 5000 more problems for you to solve.

Share




Using the data shown below, draw the most stable conformation of *cis*-1-bromo-4-methylcyclohexane.



When R = Br, $K = 2.2$
When R = Me, $K = 19$

VIDEO SOLUTION



How to Reach Us

Todd's Test Prep
2255 Glades Road
Suite 324A
Boca Raton, Florida 33431
E-mail: help@orgoreview.com

Links

[Contact](#)
[Terms](#)
[Privacy Policy](#)

follow us



Copyright 2026. All Rights Reserved.