



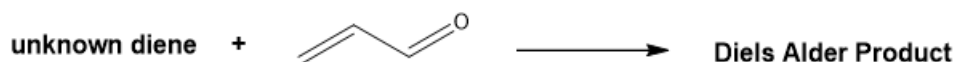
ORGOREVIEW

Question Vault

Welcome to orgoreview question vault. We have 5000 more problems for you to solve.

Share


Consider the following Diels Alder reaction.



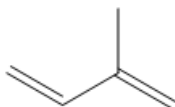
Which diene would be the predicted to be the least reactive in the Diels Alder reaction?

Here are some possible dienes.


☐ (A)



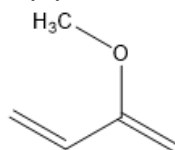
☐ (B)



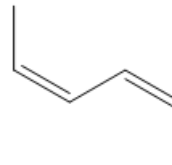
☐ (C)



☐ (D)



☐ (E)



How to Reach Us
Todd's Test Prep
2255 Glades Road

Suite 324A
Boca Raton, Florida 33431
E-mail: help@orgoreview.com

Links

[Contact](#)

[Terms](#)

[Privacy Policy](#)

follow us



Copyright 2025. All Rights Reserved.