



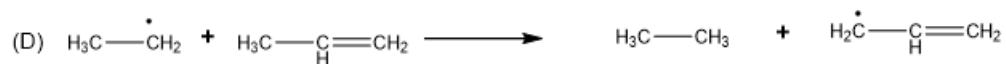
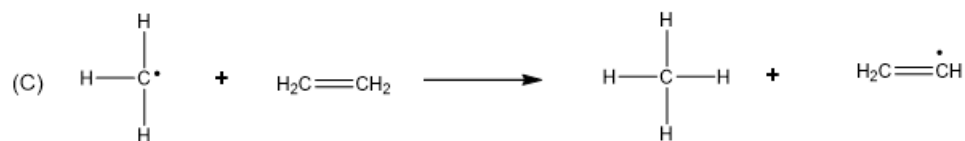
ORGOREVIEW

Question Vault


Welcome to orgoreview question vault. We have 5000 more problems for you to solve.

Share

Select the reaction that would proceed as shown (an exothermic reaction with a negative ΔH°)



(A) (B) (C) (D) (E)



How to Reach Us

Todd's Test Prep
2255 Glades Road
Suite 324A
Boca Raton, Florida 33431
E-mail: help@orgoreview.com

Links

[Contact](#)

[Terms](#)

[Privacy Policy](#)

follow us

