



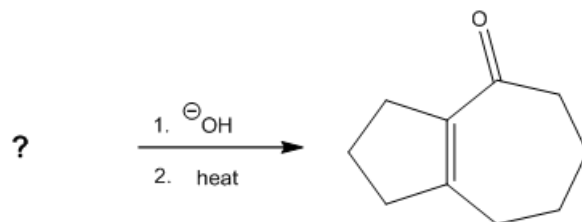
ORGOREVIEW

Question Vault

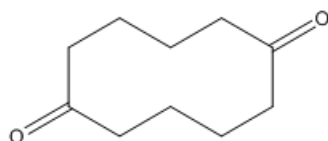
Welcome to orgoreview question vault. We have 5000 more problems for you to solve.

Share

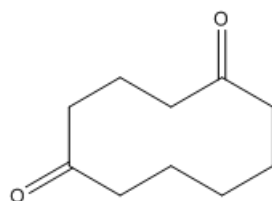
Choose the reactant(s) that would give the product shown in the following reaction.



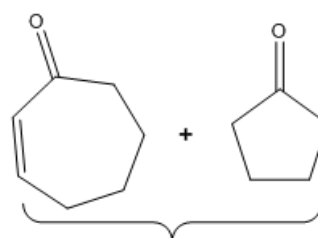
☐ (A)



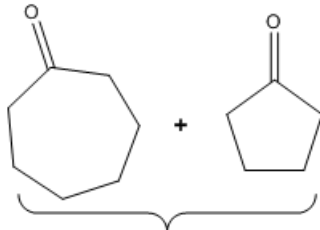
☐ (B)



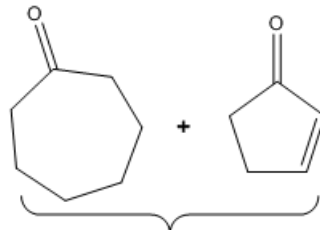
☐ (C)



☐ (D)



☐ (E)



VIDEO SOLUTION

How to Reach Us

Todd's Test Prep
2255 Glades Road
Suite 324A
Boca Raton, Florida 33431
E-mail: help@orgoreview.com

Links

[Contact](#)
[Terms](#)
[Privacy Policy](#)

follow us



Copyright 2025. All Rights Reserved.