



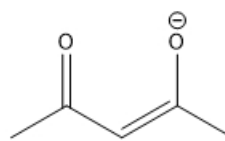
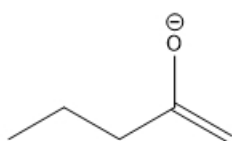
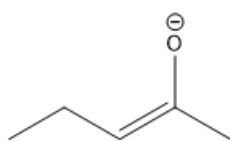
ORGOREVIEW

Question Vault

Welcome to orgoreview question vault. We have 5000 more problems for you to solve.

Share

Choose the order that has the following enolate anions correctly arranged with respect to increasing stability.



(A)

1 2 3

increasing
→
stability

(B)

1 3 2

increasing
→
stability

(C)

2 1 3

increasing
→
stability

(D)

2 3 1

increasing
→
stability

(E)

3 2 1

increasing
→
stability


(F)

3 1 2

increasing
→
stability

VIDEO SOLUTION





How to Reach Us

Todd's Test Prep
2255 Glades Road
Suite 324A
Boca Raton, Florida 33431
E-mail: help@orgoreview.com

Links

[Contact](#)

[Terms](#)

[Privacy Policy](#)

follow us

