



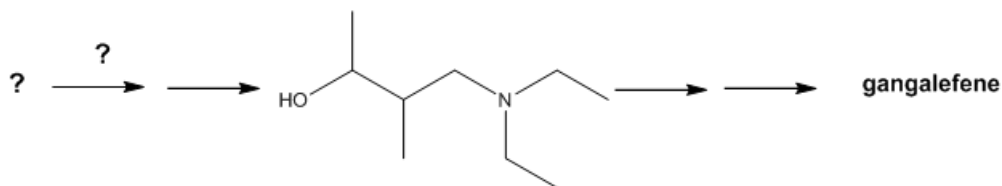
# ORGOREVIEW

## Question Vault

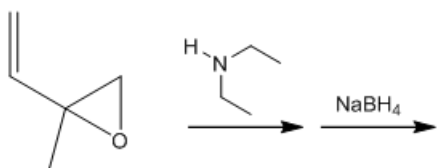
Welcome to orgoreview question vault. We have 5000 more problems for you to solve.

Share

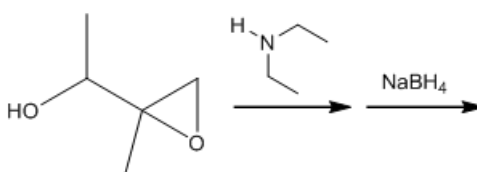
Choose the reaction sequence that would lead to a key intermediate in the synthesis of the coronary vasodilator gangalefene.



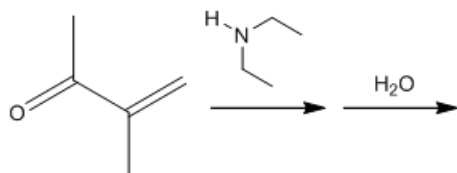
☐ (A)



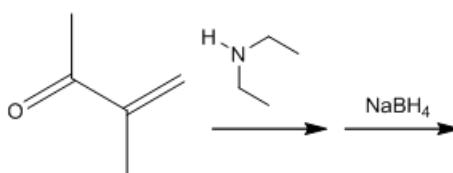
☐ (B)



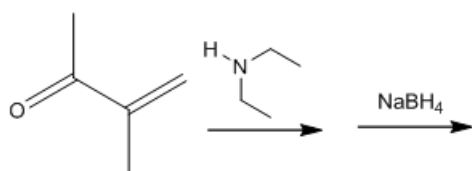
☐ (C)



☐ (D)



☐ (E)



#### How to Reach Us

Todd's Test Prep  
2255 Glades Road  
Suite 324A  
Boca Raton, Florida 33431  
E-mail: [help@orgoreview.com](mailto:help@orgoreview.com)

#### Links

[Contact](#)  
[Terms](#)  
[Privacy Policy](#)

**follow us**



Copyright 2026. All Rights Reserved.