



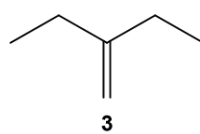
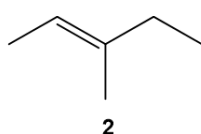
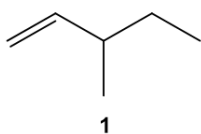
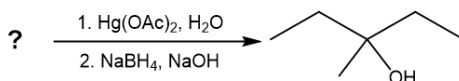
ORGOREVIEW

Question Vault

Welcome to orgoreview question vault. We have 5000 more problems for you to solve.

Share

Choose the alkene(s) that could be used to produce 3-methyl-3-pentanol as the major product of the following reaction.



- ☐ (A) 1 only ☐ (B) 2 only ☐ (C) 3 only ☐ (D) 1 or 2 ☐ (E) 2 or 3 ☐ (F) 1, 2 or 3

How to Reach Us
Todd's Test Prep

2255 Glades Road
Suite 324A
Boca Raton, Florida 33431
E-mail: help@orgoreview.com

Links

[Contact](#)

[Terms](#)

[Privacy Policy](#)

follow us



Copyright 2025. All Rights Reserved.