



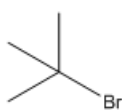
# ORGOREVIEW

## Question Vault

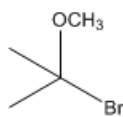
Welcome to orgoreview question vault. We have 5000 more problems for you to solve.

Share

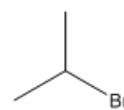
Choose the order that has the following compounds correctly arranged with respect to reactivity in a  $S_N1$  reaction.



i



ii



iii

(A)

i ii iii

increasing

→  
reactivity

(B)

i iii ii

increasing

→  
reactivity

(C)

ii i iii

increasing

→  
reactivity

(D)

ii iii i

increasing

→  
reactivity

(E)

iii ii i

increasing

→  
reactivity

(F)

iii i ii

increasing

→  
reactivity

### How to Reach Us

Todd's Test Prep

2255 Glades Road

Suite 324A

Boca Raton, Florida 33431

E-mail: [help@orgoreview.com](mailto:help@orgoreview.com)

[Links](#)

[Contact](#)

[Terms](#)

[Privacy Policy](#)

**follow us**



Copyright 2026. All Rights Reserved.