




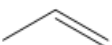
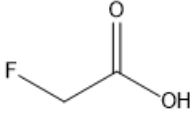
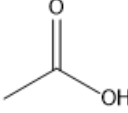
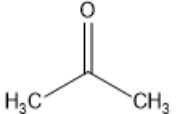
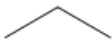
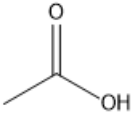
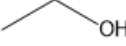
ORGOREVIEW

Question Vault

Welcome to orgoreview question vault. We have 5000 more problems for you to solve.

Share

For each of the following pairs of compounds circle the one with the hydrogen of greatest acidity.

- (A)  or 
- (B)  or 
- (C)  or 
- (D) H_2O or H_2S
- (E)  or 

How to Reach Us

Todd's Test Prep
2255 Glades Road
Suite 324A
Boca Raton, Florida 33431
E-mail: help@orgoreview.com

Links

[Contact](#)
[Terms](#)
[Privacy Policy](#)

follow us

