



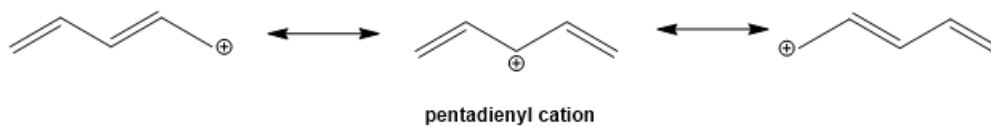
ORGOREVIEW

Question Vault

Welcome to orgoreview question vault. We have 5000 more problems for you to solve.

Share

Consider the π molecular orbitals of the pentadienyl cation.

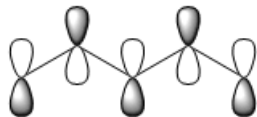


Which one of these orbitals is the LUMO of the pentadienyl cation?

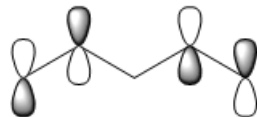
(A)



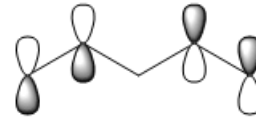
(B)



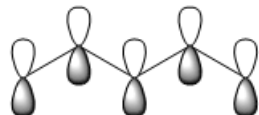
(C)



(D)



(E)



How to Reach Us

Todd's Test Prep
2255 Glades Road
Suite 324A
Boca Raton, Florida 33431
E-mail: help@orgoreview.com

Links

[Contact](#)

[Terms](#)

[Privacy Policy](#)

follow us



Copyright 2026. All Rights Reserved.