



ORGOREVIEW

Question Vault

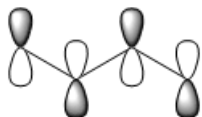
Welcome to orgoreview question vault. We have 5000 more problems for you to solve.

Share

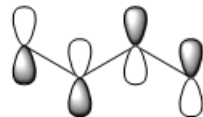


Consider the four π molecular orbitals of butadiene. Which of the following drawings does not properly represent one of the four π orbitals of butadiene?

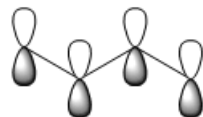
(A)



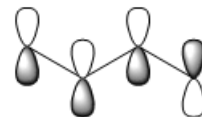
(B)




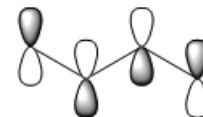
(C)



(D)



(E)



How to Reach Us

Todd's Test Prep
2255 Glades Road
Suite 324A
Boca Raton, Florida 33431
E-mail: help@orgoreview.com

Links

[Contact](#)
[Terms](#)
[Privacy Policy](#)

follow us



Copyright 2026. All Rights Reserved.