



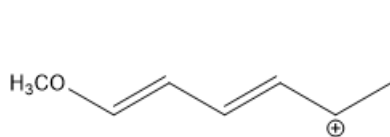
ORGOREVIEW

Question Vault

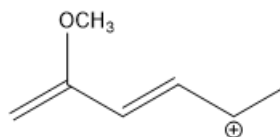
Welcome to orgoreview question vault. We have 5000 more problems for you to solve.

Share

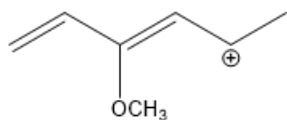
Consider the four carbocations shown below. Which two are the most stabilized by the methoxy substituent?



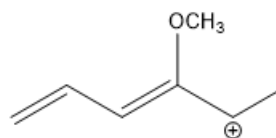
i



ii



iii



iv

- (A) (i) and (ii) (B) (i) and (iii) (C) (ii) and (iii) (D) (ii) and (iv) (E) (iii) and (iv)

2255 Glades Road
Suite 324A
Boca Raton, Florida 33431
E-mail: help@orgoreview.com

Links

[Contact](#)

[Terms](#)

[Privacy Policy](#)

follow us



Copyright 2026. All Rights Reserved.