



# ORGOREVIEW

## Question Vault

Welcome to orgoreview question vault. We have 5000 more problems for you to solve.

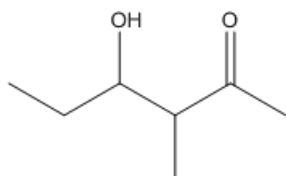
Share

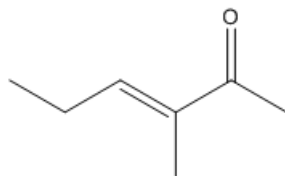
Consider these molecules.

Which of these molecules is an enal?

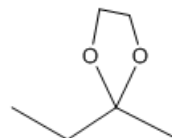
(A)



(B)



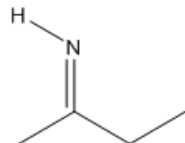
(C)



(D)



(E)



VIDEO SOLUTION



### How to Reach Us

Todd's Test Prep

2255 Glades Road

Suite 324A

Boca Raton, Florida 33431

E-mail: [help@orgoreview.com](mailto:help@orgoreview.com)

### Links

[Contact](#)

[Terms](#)

[Privacy Policy](#)

### follow us



Copyright 2026. All Rights Reserved.