



ORGOREVIEW

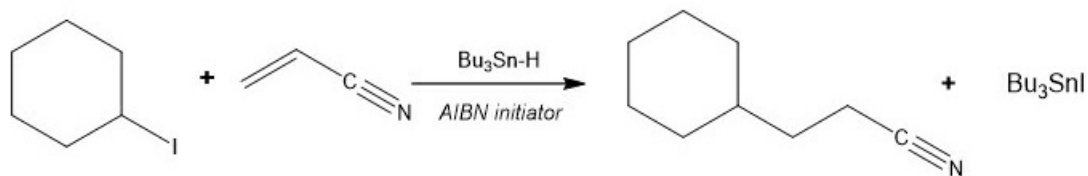
Question Vault

Welcome to orgoreview question vault. We have 5000 more problems for you to solve.

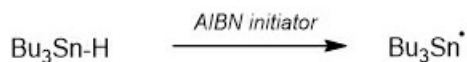
Share

The following reaction goes by a free radical chain reaction. The overall reaction and the initiation reaction are shown. Continue the reaction scheme by providing the structures of the two intermediates A and B in the propagation steps.

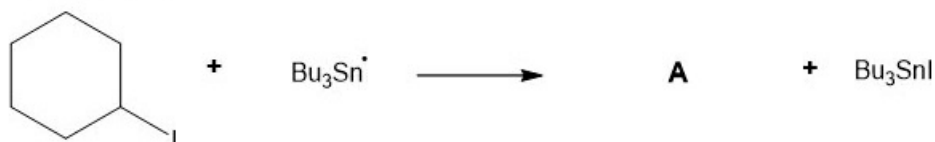
Overall Reaction



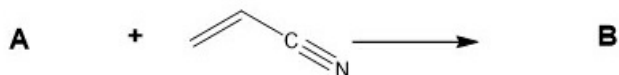
Initiation Reaction



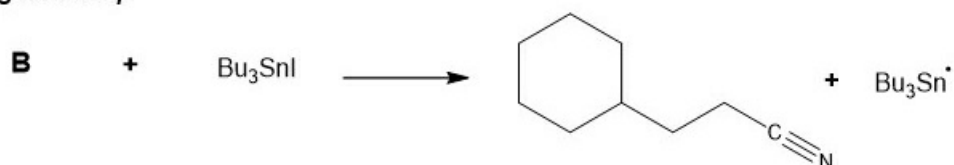
First propagation step



Second propagation step



Third propagation step





How to Reach Us

Todd's Test Prep
2255 Glades Road
Suite 324A
Boca Raton, Florida 33431
E-mail: help@orgoreview.com

Links

[Contact](#)
[Terms](#)
[Privacy Policy](#)

follow us



Copyright 2025. All Rights Reserved.