



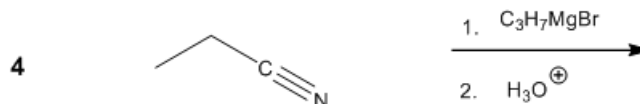
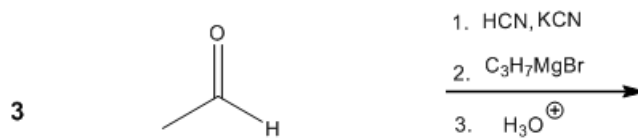
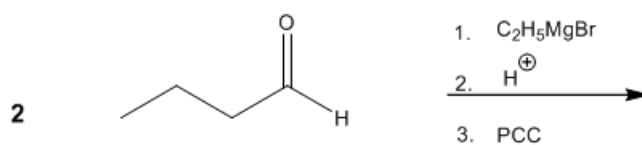
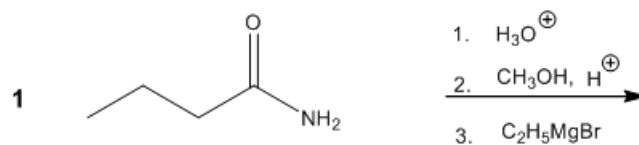
ORGOREVIEW

Question Vault

Welcome to orgoreview question vault. We have 5000 more problems for you to solve.

Share

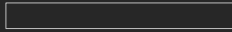
Which two reaction sequences will form the same product?



- (A) 1 and 2 (B) 1 and 3 (C) 1 and 4 (D) 2 and 3 (E) 2 and 4 (F) 3 and 4

VIDEO SOLUTION





How to Reach Us

Todd's Test Prep
2255 Glades Road
Suite 324A
Boca Raton, Florida 33431
E-mail: help@orgoreview.com

Links

[Contact](#)
[Terms](#)
[Privacy Policy](#)

follow us

