

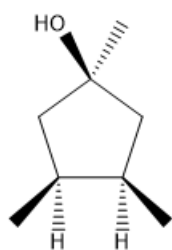


ORGOREVIEW

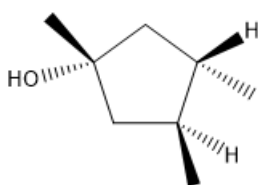
Question Vault

Welcome to orgoreview question vault. We have 5000 more problems for you to solve.

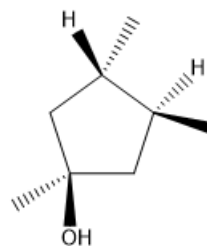
Share

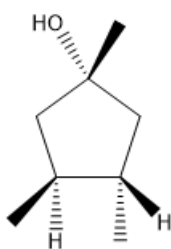
1



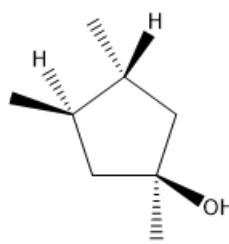
2



3

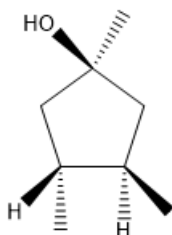


4



5


Which of the above structures is a diastereomer of C?



C

- (A) 1 (B) 3 (C) 2 and 4 (D) 1 and 5 (E) 4

VIDEO SOLUTION



How to Reach Us

Todd's Test Prep
2255 Glades Road
Suite 324A
Boca Raton, Florida 33431
E-mail: help@orgoreview.com

Links

[Contact](#)
[Terms](#)
[Privacy Policy](#)

follow us

