



# ORGOREVIEW

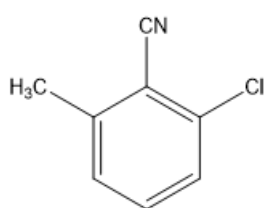
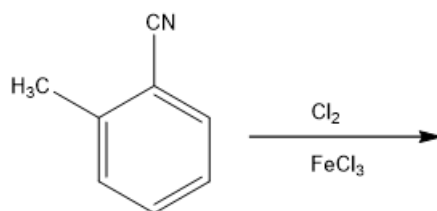
## Question Vault

Welcome to orgoreview question vault. We have 5000 more problems for you to solve.

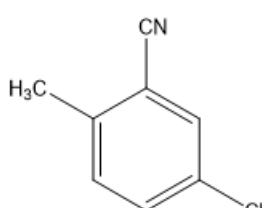
Share

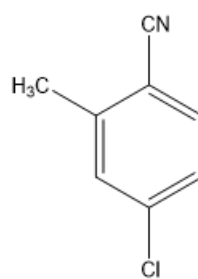
Predict the two major products of the following reaction.



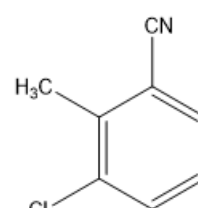
1



2



3




4

- (A) 1+2    (B) 1+3    (C) 1+4    (D) 2+3    (E) 2+4    (F) 3+4

VIDEO SOLUTION





### How to Reach Us

Todd's Test Prep  
2255 Glades Road  
Suite 324A  
Boca Raton, Florida 33431  
E-mail: [help@orgoreview.com](mailto:help@orgoreview.com)

### Links

[Contact](#)

[Terms](#)

[Privacy Policy](#)

**follow us**

