



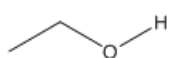
# ORGOREVIEW

## Question Vault

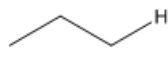
Welcome to orgoreview question vault. We have 5000 more problems for you to solve.

Share

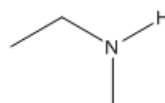
Choose the order that has the following hydrocarbons correctly arranged with respect to increasing acidity of the indicated proton.



i



ii



iii

(A)

i ii iii

increasing  
acidity →

(B)

i iii ii

increasing  
acidity →

(C)

ii i iii

increasing  
acidity →

(D)

ii iii i

increasing  
acidity →

(E)

iii ii i

increasing  
acidity →

(F)

iii i ii

increasing  
acidity →

### How to Reach Us

Todd's Test Prep  
2255 Glades Road  
Suite 324A

Boca Raton, Florida 33431

E-mail: [help@orgoreview.com](mailto:help@orgoreview.com)

**Links**

[Contact](#)

[Terms](#)

[Privacy Policy](#)

**follow us**



Copyright 2026. All Rights Reserved.