



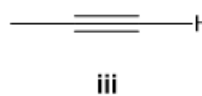
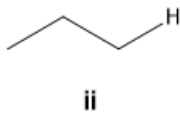
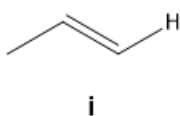
# ORGOREVIEW

## Question Vault

Welcome to orgoreview question vault. We have 5000 more problems for you to solve.

Share

Choose the order that has the following hydrocarbons correctly arranged with respect to increasing acidity of the indicated proton.



☐ (A)

iii ii i  
increasing  
→  
acidity

☐ (B)

iii i ii  
increasing  
→  
acidity

☐ (C)

ii i iii  
increasing  
→  
acidity

☐ (D)

ii iii i  
increasing  
→  
acidity

☐ (E)

i ii iii  
increasing  
→  
acidity

### How to Reach Us

Todd's Test Prep  
2255 Glades Road  
Suite 324A  
Boca Raton, Florida 33431  
E-mail: [help@orgoreview.com](mailto:help@orgoreview.com)

**Links**

[Contact](#)

[Terms](#)

[Privacy Policy](#)

**follow us**



Copyright 2025. All Rights Reserved.