



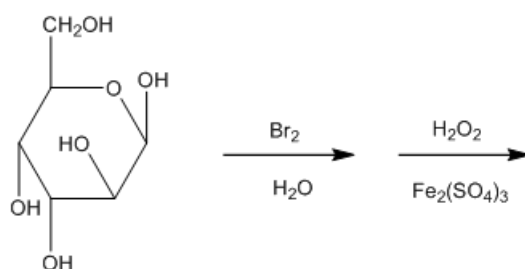
ORGOREVIEW

Question Vault

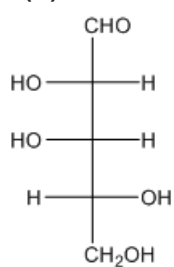
Welcome to orgoreview question vault. We have 5000 more problems for you to solve.

Share

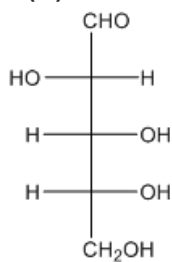
Which Fischer projection represents the open chain form of the product of Ruff degradation of β -D-altropyranose?



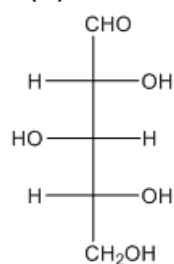
(A)



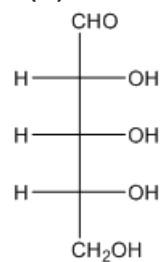
(B)



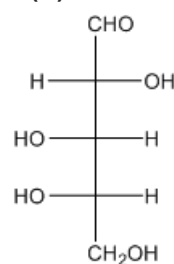
(C)



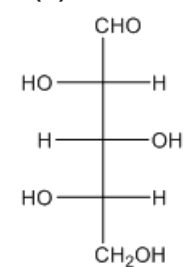
(D)



(E)



(F)



VIDEO SOLUTION





How to Reach Us

Todd's Test Prep
2255 Glades Road
Suite 324A
Boca Raton, Florida 33431
E-mail: help@orgoreview.com

Links

[Contact](#)
[Terms](#)
[Privacy Policy](#)

follow us

