



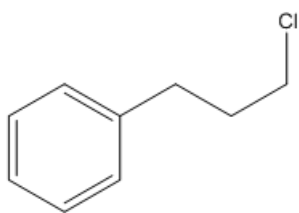
ORGOREVIEW

Question Vault

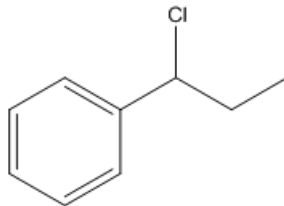
Welcome to orgoreview question vault. We have 5000 more problems for you to solve.

Share

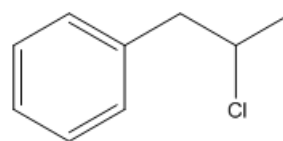
Choose the order that has the following compounds correctly arranged with respect to increasing reactivity in S_N1 reactions.



i



ii

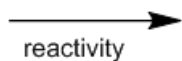


iii

(A)

i ii iii

increasing

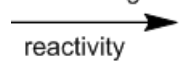


reactivity

(B)

i iii ii

increasing

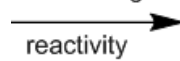


reactivity

(C)

ii i iii

increasing

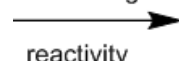


reactivity

(D)

ii iii i

increasing

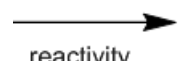


reactivity

(E)

iii ii i

increasing



reactivity

(F)

iii i ii

increasing



reactivity

VIDEO SOLUTION



How to Reach Us

Todd's Test Prep

2255 Glades Road

Suite 324A

Boca Raton, Florida 33431

E-mail: help@orgoreview.com

Links

[Contact](#)

[Terms](#)

[Privacy Policy](#)

follow us



Copyright 2026. All Rights Reserved.