



# ORGOREVIEW

## Question Vault

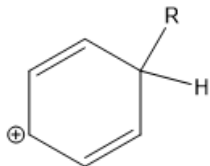
Welcome to orgoreview question vault. We have 5000 more problems for you to solve.

Share

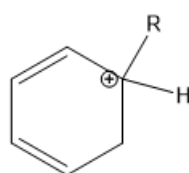
 

Which of the following is a reasonable depiction of the intermediate in the Friedel-Crafts alkylation of benzene?

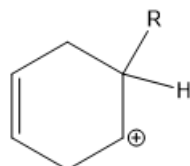
(A)



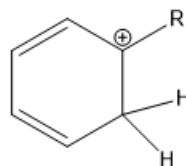
(B)



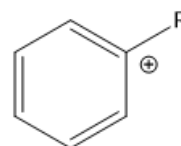
(C)



(D)



(E)



## VIDEO SOLUTION



### How to Reach Us

Todd's Test Prep  
2255 Glades Road  
Suite 324A  
Boca Raton, Florida 33431  
E-mail: [help@orgoreview.com](mailto:help@orgoreview.com)

[Links](#)

[Contact](#)

[Terms](#)

[Privacy Policy](#)

**follow us**



Copyright 2026. All Rights Reserved.