



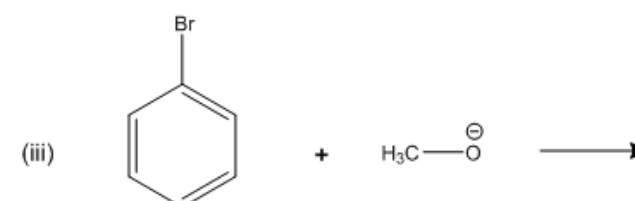
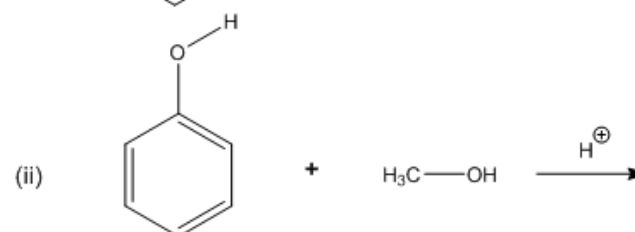
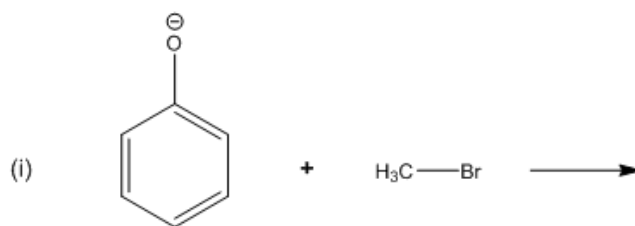
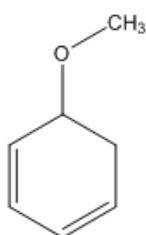
# ORGOREVIEW

## Question Vault

Welcome to orgoreview question vault. We have 5000 more problems for you to solve.

Share

Choose those reactions that would be a good synthesis of the following ether.



- ☐ (A) i    ☐ (B) ii    ☐ (C) iii    ☐ (D) i & ii    ☐ (E) i & iii    ☐ (F) ii & iii

#### How to Reach Us

Todd's Test Prep  
2255 Glades Road  
Suite 324A  
Boca Raton, Florida 33431  
E-mail: [help@orgoreview.com](mailto:help@orgoreview.com)

#### Links

[Contact](#)

[Terms](#)

[Privacy Policy](#)

#### follow us

