



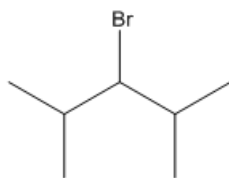
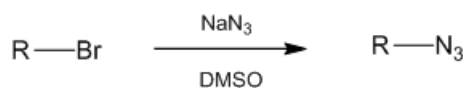
ORGOREVIEW

Question Vault

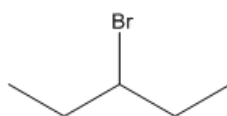
Welcome to orgoreview question vault. We have 5000 more problems for you to solve.

Share

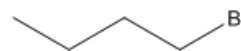
Select the order that has the following alkyl bromides correctly arranged with respect to increasing reactivity toward the following general substitution reaction.



1



2



3

(A)

1 2 3

increasing



reactivity

(B)

1 3 2

increasing



reactivity

(C)

2 1 3

increasing



reactivity

(D)

2 3 1

increasing



reactivity

(E)

3 2 1

increasing



reactivity

(F)

3 1 2

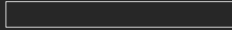
increasing



reactivity

VIDEO SOLUTION





How to Reach Us

Todd's Test Prep
2255 Glades Road
Suite 324A
Boca Raton, Florida 33431
E-mail: help@orgoreview.com

Links

[Contact](#)

[Terms](#)

[Privacy Policy](#)

follow us



Copyright 2026. All Rights Reserved.