



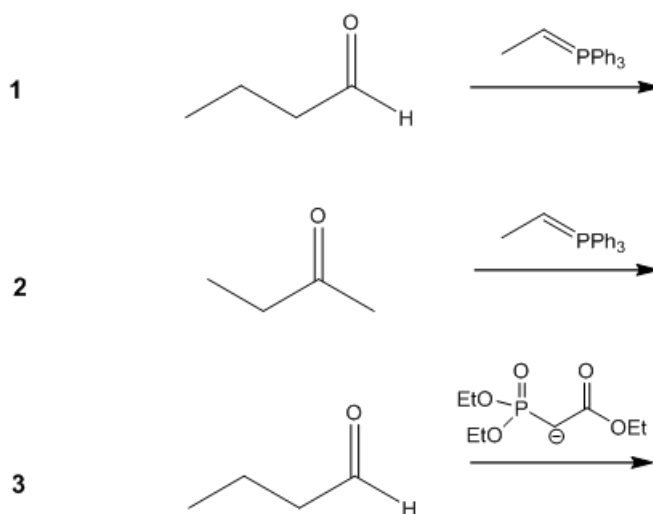
# ORGOREVIEW

## Question Vault

Welcome to orgoreview question vault. We have 5000 more problems for you to solve.

Share


Each of the three reactions below will give a mixture of E and Z products. Select the order that has these reactions correctly arranged with respect to increasing % of E product.



☐ (A)

1 2 3


increasing

  
E product

☐ (B)

1 3 2


increasing

  
E product

☐ (C)

2 1 3


increasing

  
E product

☐ (D)

2 3 1


increasing

  
E product

☐ (E)

3 2 1


increasing


  
E product

☐ (F)

3 1 2

increasing

  
E product



**How to Reach Us**

Todd's Test Prep  
2255 Glades Road  
Suite 324A  
Boca Raton, Florida 33431  
E-mail: [help@orgoreview.com](mailto:help@orgoreview.com)

**Links**

[Contact](#)

[Terms](#)

[Privacy Policy](#)

**follow us**

