



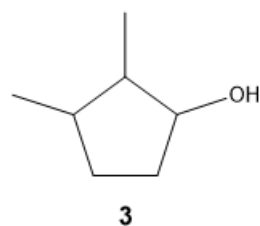
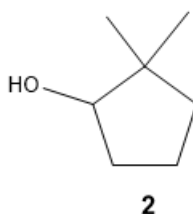
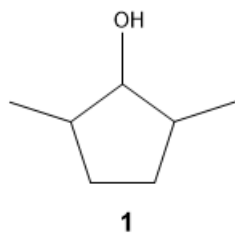
ORGOREVIEW

Question Vault

Welcome to orgoreview question vault. We have 5000 more problems for you to solve.

Share

Choose the reactant(s) that would give 1,2-dimethylcyclopentene as the major product upon acid catalyzed dehydration.



- ☐ (A) 1 only ☐ (B) 2 only ☐ (C) 3 only ☐ (D) 1 and 2 ☐ (E) 1 and 3 ☐ (F) 2 and 3

VIDEO SOLUTION



How to Reach Us

Todd's Test Prep
2255 Glades Road
Suite 324A
Boca Raton, Florida 33431
E-mail: help@orgoreview.com

Links

[Contact](#)

[Terms](#)

[Privacy Policy](#)

follow us



Copyright 2026. All Rights Reserved.