



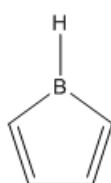
# ORGOREVIEW

## Question Vault

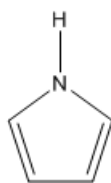
Welcome to orgoreview question vault. We have 5000 more problems for you to solve.

Share

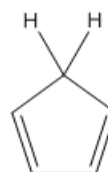
Choose the following species that would be predicted to be aromatic according to Hückel's rule.



1



2



3

- (A) 1     (B) 2     (C) 3     (D) 1 and 2     (E) 1 and 3

### How to Reach Us

Todd's Test Prep

2255 Glades Road

Suite 324A

Boca Raton, Florida 33431

E-mail: [help@orgoreview.com](mailto:help@orgoreview.com)

**Links**

[Contact](#)

[Terms](#)

[Privacy Policy](#)

**follow us**



Copyright 2026. All Rights Reserved.