



ORGOREVIEW

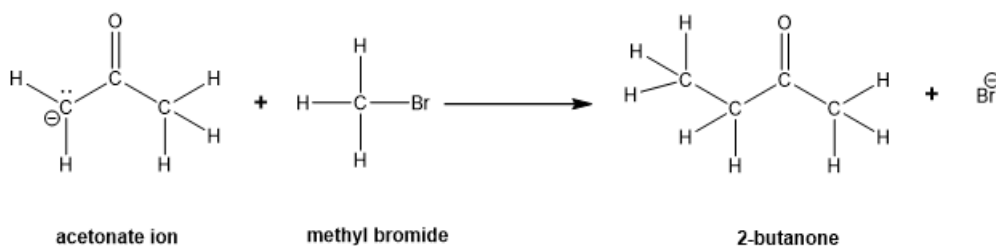
Question Vault

Welcome to orgoreview question vault. We have 5000 more problems for you to solve.

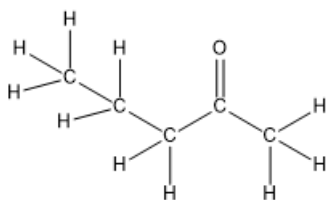
Share



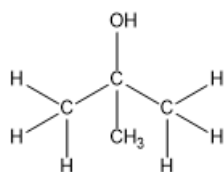
In addition to 2-butanone, a second product is formed in the following acid-base reaction. Choose the structure for this second product.



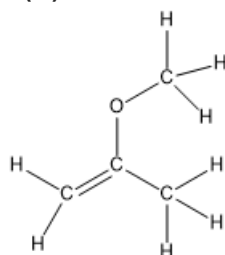
(A)



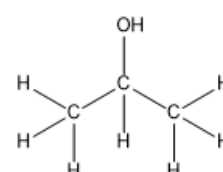
(B)



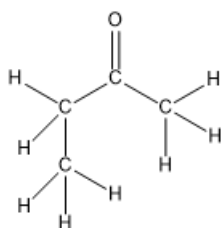
(C)




(D)



(E)





How to Reach Us

Todd's Test Prep
2255 Glades Road
Suite 324A
Boca Raton, Florida 33431
E-mail: help@orgoreview.com

Links

[Contact](#)

[Terms](#)

[Privacy Policy](#)

follow us

