



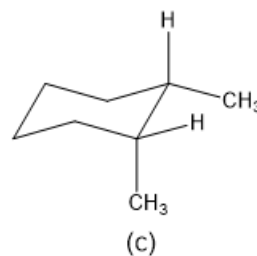
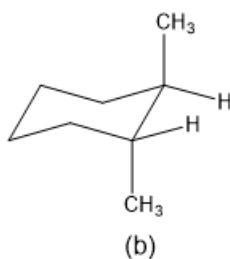
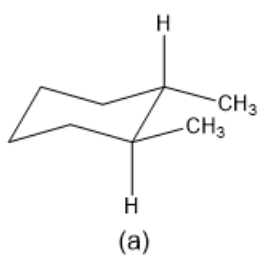
# ORGOREVIEW

## Question Vault

Welcome to orgoreview question vault. We have 5000 more problems for you to solve.

Share

Choose the order that has the following structures correctly ranked with respect to increasing stability. (the most stable structure is on the right)



- ☐ (A) (a) < (b) < (c)    ☐ (B) (b) < (a) < (c)    ☐ (C) (c) < (b) < (a)    ☐ (D) (b) < (c) < (a)    ☐ (E) (c) < (a) < (b)

## VIDEO SOLUTION



### How to Reach Us

Todd's Test Prep  
2255 Glades Road  
Suite 324A

Boca Raton, Florida 33431  
E-mail: [help@orgoreview.com](mailto:help@orgoreview.com)

**Links**

[Contact](#)

[Terms](#)

[Privacy Policy](#)

**follow us**



Copyright 2025. All Rights Reserved.