



# ORGOREVIEW

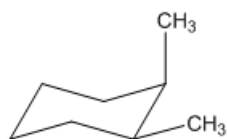
## Question Vault

Welcome to orgoreview question vault. We have 5000 more problems for you to solve.

Share

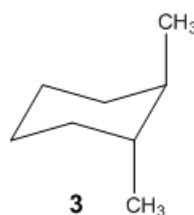
Rank these dimethylcyclohexane conformers in order of stability.



1



2



3

(A)

1 2 3

increasing



stability

(B)

1 3 2

increasing



stability

(C)

2 1 3

increasing



stability

(D)

2 3 1

increasing



stability

(E)

3 2 1

increasing




stability

(F)

3 1 2


increasing



stability

VIDEO SOLUTION





### How to Reach Us

Todd's Test Prep  
2255 Glades Road  
Suite 324A  
Boca Raton, Florida 33431  
E-mail: [help@orgoreview.com](mailto:help@orgoreview.com)

### Links

[Contact](#)

[Terms](#)

[Privacy Policy](#)

### follow us

