



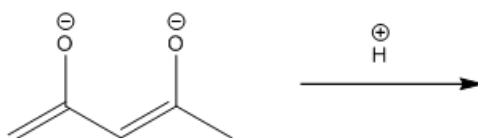
ORGOREVIEW

Question Vault

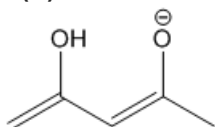
Welcome to orgoreview question vault. We have 5000 more problems for you to solve.

Share

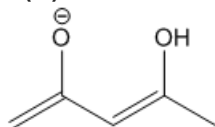
Based upon an understanding of product stability, predict the product formed when the following dianion reacts with one equivalent of acid.



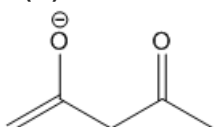
☐ (A)



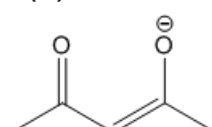
☐ (B)



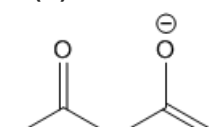
☐ (C)



☐ (D)



☐ (E)



VIDEO SOLUTION

~

How to Reach Us
Todd's Test Prep
2255 Glades Road

Suite 324A
Boca Raton, Florida 33431
E-mail: help@orgoreview.com

Links

[Contact](#)

[Terms](#)

[Privacy Policy](#)

follow us



Copyright 2025. All Rights Reserved.