

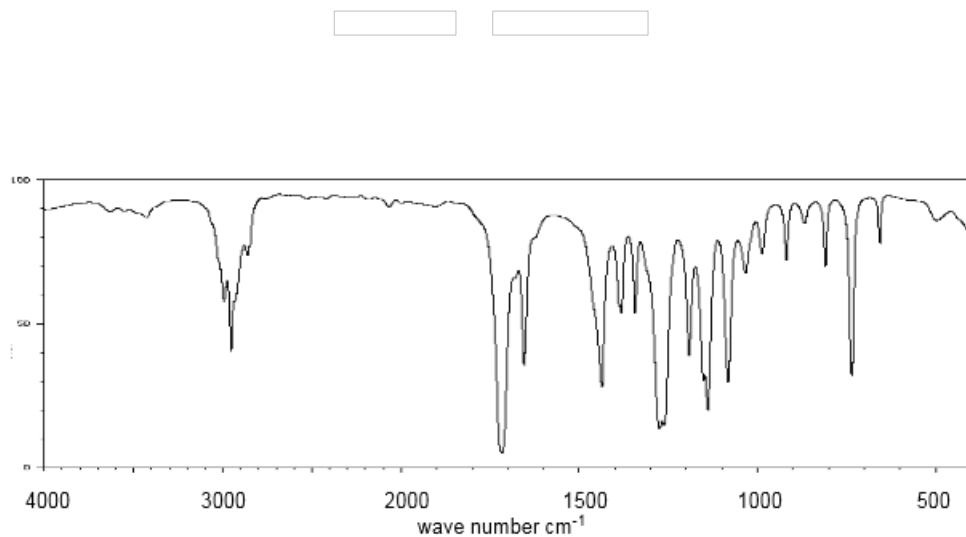


ORGOREVIEW

Question Vault

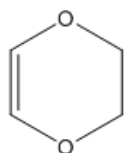
Welcome to orgoreview question vault. We have 5000 more problems for you to solve.

Share

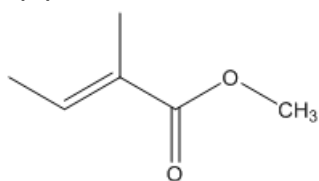


Choose a structure consistent with a formula $\text{C}_6\text{H}_{10}\text{O}_2$ and the following infrared spectrum.

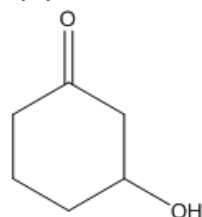
(A)



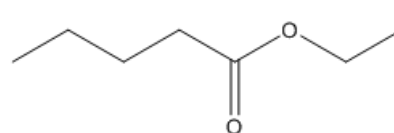
(B)



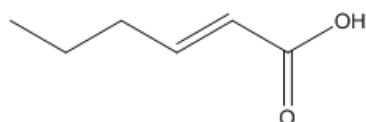
(C)




(D)



(E)





How to Reach Us

Todd's Test Prep
2255 Glades Road
Suite 324A
Boca Raton, Florida 33431
E-mail: help@orgoreview.com

Links

[Contact](#)

[Terms](#)

[Privacy Policy](#)

follow us

