



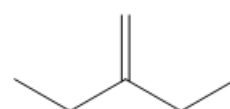
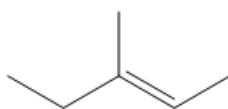
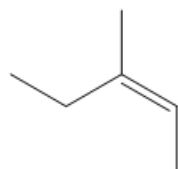
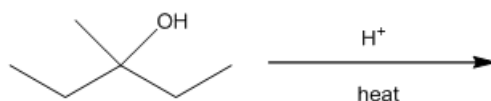
ORGOREVIEW

Question Vault

Welcome to orgoreview question vault. We have 5000 more problems for you to solve.

Share

Select the order that has the following alkene products correctly arranged with respect to increasing percent yield of the following acid-catalyzed dehydration reaction.



(A)

1 2 3

increasing



product %

(B)

1 3 2

increasing



product %

(C)

2 1 3

increasing




product %

(D)

2 3 1

increasing



product %

(E)

3 2 1

increasing



product %

(F)

3 1 2

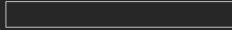
increasing



product %

VIDEO SOLUTION





How to Reach Us

Todd's Test Prep
2255 Glades Road
Suite 324A
Boca Raton, Florida 33431
E-mail: help@orgoreview.com

Links

[Contact](#)
[Terms](#)
[Privacy Policy](#)

follow us

