



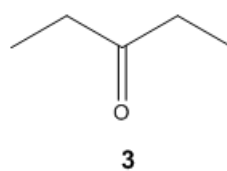
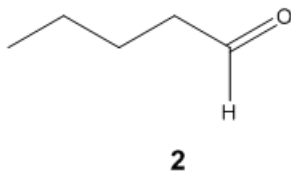
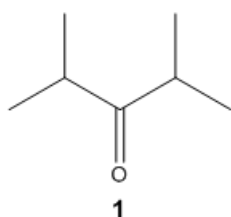
ORGOREVIEW

Question Vault

Welcome to orgoreview question vault. We have 5000 more problems for you to solve.

Share

Choose order that has the following compounds correctly arranged with respect to increasing rate of reaction with LiAlH_4 . (Most reactive compound on the right)



☐ (A)

1 2 3

increasing
→
reaction rate

☐ (B)

3 1 2

increasing
→
reaction rate

☐ (C)

3 2 1

increasing
→
reaction rate

☐ (D)

2 3 1

increasing
→
reaction rate

☐ (E)

1 3 2

increasing
→
reaction rate

How to Reach Us

Todd's Test Prep
2255 Glades Road
Suite 324A

Boca Raton, Florida 33431
E-mail: help@orgoreview.com

Links

[Contact](#)

[Terms](#)

[Privacy Policy](#)

follow us



Copyright 2025. All Rights Reserved.