



# ORGOREVIEW

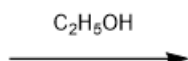
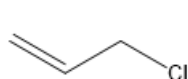
## Question Vault

Welcome to orgoreview question vault. We have 5000 more problems for you to solve.

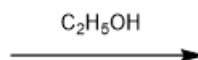
Share

Which  $S_N1$  reaction shown below is expected to be fastest?

☐ (A)



☐ (B)



### How to Reach Us

Todd's Test Prep  
2255 Glades Road  
Suite 324A  
Boca Raton, Florida 33431  
E-mail: [help@orgoreview.com](mailto:help@orgoreview.com)

### Links

[Contact](#)  
[Terms](#)  
[Privacy Policy](#)

follow us



Copyright 2026. All Rights Reserved.