



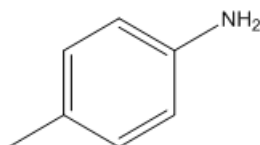
# ORGOREVIEW

## Question Vault

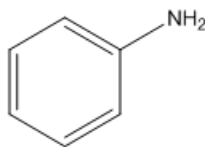
Welcome to orgoreview question vault. We have 5000 more problems for you to solve.

Share

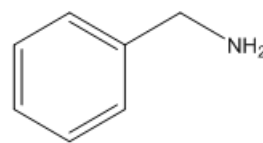
Choose the order that has the following amines correctly arranged with respect to increasing basicity.



1



2



3

☐ (A)

1 2 3

increasing

→  
basicity

☐ (B)

1 3 2

increasing

→  
basicity

☐ (C)

2 1 3

increasing

→  
basicity

☐ (D)

2 3 1

increasing

→  
basicity

☐ (E)

3 2 1

increasing

→  
basicity

☐ (F)

3 1 2

increasing

→  
basicity

## VIDEO SOLUTION



How to Reach Us

Todd's Test Prep  
2255 Glades Road  
Suite 324A  
Boca Raton, Florida 33431  
E-mail: [help@orgoreview.com](mailto:help@orgoreview.com)

**Links**

[Contact](#)

[Terms](#)

[Privacy Policy](#)

**follow us**



Copyright 2025. All Rights Reserved.