



ORGOREVIEW

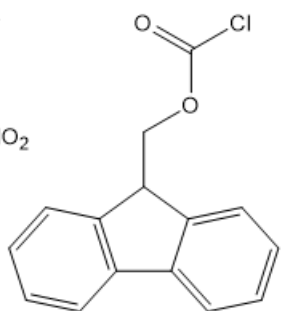
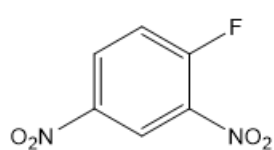
Question Vault

Welcome to orgoreview question vault. We have 5000 more problems for you to solve.

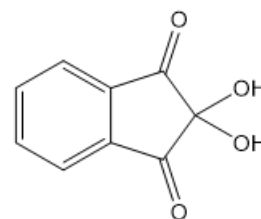
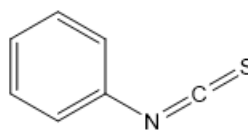
Share

Each of the following reagents is used for the study of amino acids and/or peptides. Assign the role of each from the following choices by choosing the answer that has the appropriate number listed under each reagent structure.

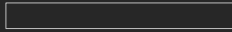
1. Amino acid synthesis
2. Peptide synthesis
3. N-terminal amino acid identification
4. C-terminal amino acid identification
5. Amino acid detection



NH_3, HCN



(A)	4	2	1	3	5
(B)	3	1	2	4	5
(C)	4	3	1	5	2
(D)	3	2	1	3	5
(E)	4	3	2	5	1
(F)	3	1	4	5	2



How to Reach Us

Todd's Test Prep
2255 Glades Road
Suite 324A
Boca Raton, Florida 33431
E-mail: help@orgoreview.com

Links

[Contact](#)
[Terms](#)
[Privacy Policy](#)

follow us

