



# ORGOREVIEW

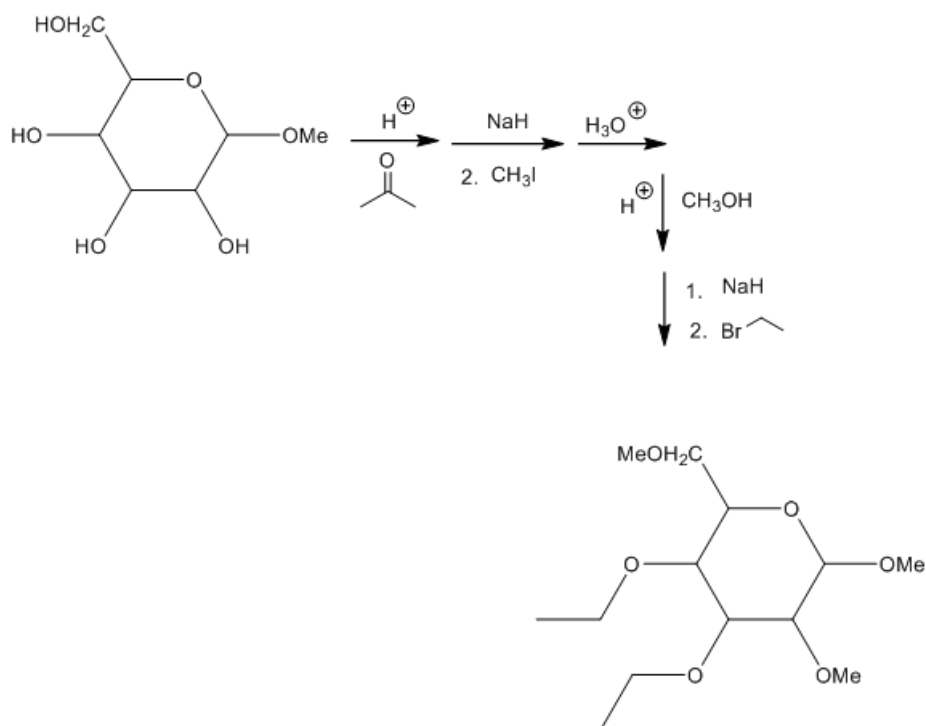
## Question Vault

Welcome to orgoreview question vault. We have 5000 more problems for you to solve.

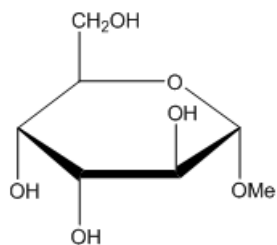
Share



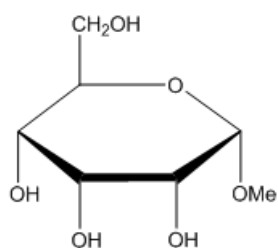
Choose the correct D-1-O-methyl-pyranose reactant that would give the general structure shown as the only major product.



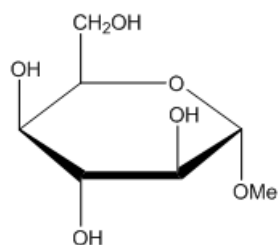
(A)



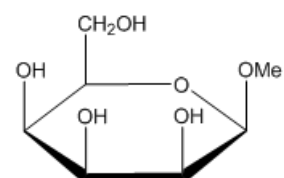
(B)




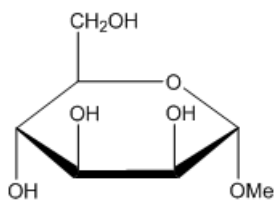
(C)



(D)



(E)



#### How to Reach Us

Todd's Test Prep  
2255 Glades Road  
Suite 324A  
Boca Raton, Florida 33431  
E-mail: [help@orgoreview.com](mailto:help@orgoreview.com)

#### Links

[Contact](#)  
[Terms](#)  
[Privacy Policy](#)

follow us

