



# ORGOREVIEW

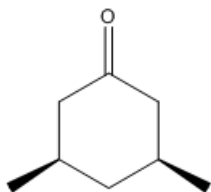
## Question Vault

Welcome to orgoreview question vault. We have 5000 more problems for you to solve.

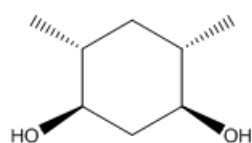
Share

Which one of the following structures does not have a plane of symmetry?

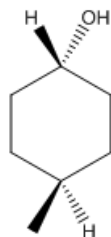
☐ (A)



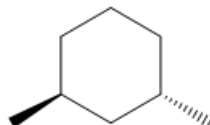
☐ (B)



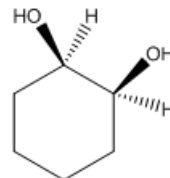
☐ (C)



☐ (D)



☐ (E)



## VIDEO SOLUTION



### How to Reach Us

Todd's Test Prep

2255 Glades Road

Suite 324A

Boca Raton, Florida 33431

E-mail: [help@orgoreview.com](mailto:help@orgoreview.com)

**Links**

[Contact](#)

[Terms](#)

[Privacy Policy](#)

**follow us**



Copyright 2026. All Rights Reserved.