



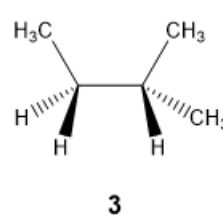
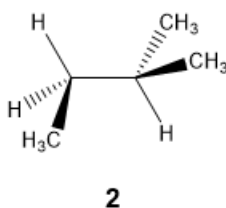
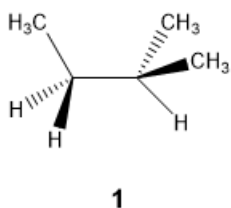
ORGOREVIEW

Question Vault

Welcome to orgoreview question vault. We have 5000 more problems for you to solve.

Share

Choose the order that has the following conformations of 2-methylbutane correctly arranged according to increasing stability.



(A)

1 2 3

increasing

→
stability

(B)

1 3 2

increasing

→
stability

(C)

2 1 3

increasing

→
stability

(D)

2 3 1

increasing

→
stability

(E)

3 2 1

increasing

→
stability

(F)

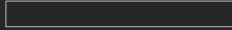
3 1 2

increasing

→
stability

VIDEO SOLUTION





How to Reach Us

Todd's Test Prep
2255 Glades Road
Suite 324A
Boca Raton, Florida 33431
E-mail: help@orgoreview.com

Links

[Contact](#)

[Terms](#)

[Privacy Policy](#)

follow us

